


YEAR 4



Year ahead meeting

Year 4 team



4T- Miss Taylor

4W- Mr Wowk



Our incredible team

Mrs Tilley

Mrs Cameron

Mrs Cook

Miss Kotlowska



Reminders

PE days: Wednesdays and Thursdays

Reading books are changed once a week

Class Dojo for updates

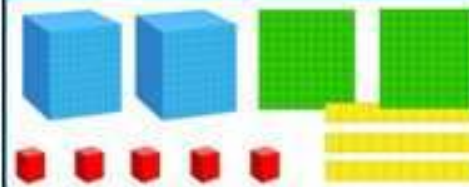
Spelling logbooks used by children weekly.

Homework

Term 1 Homework

Maths - Place Value

L.O. To find the value of pictorial representations



- How many 1000s are in this number?
- How many 100s, 10s and 1s are in this number?
- Can you represent this number on a place value grid using place value counters?
- How would this be written numerically?

Practice TTRS daily (at least x3 times, but preferably daily)

Circle the number where the 8 represents 8 hundreds

8381 678 1820 88 218 4986

Circle the number where the 4 represents the tens

749 3884 534 543 34

English - Fronted adverbials

Can you identify the fronted adverbials in the sentences below? Underline four answers.

Before the sun came up, he ate his breakfast.

All night long, she danced. As fast as he could, the rabbit hopped.

Under the clock, he stood silently.

Insert the comma in the correct place to fix the fronted adverbial

Watching from the castle wall the archer readied his bow.

Although I love sweets they are bad for my teeth.


Throughout the film my sister talked on her phone.

Challenge: Think of your own short paragraph with fronted adverbials

Curriculum




Autumn 1




Would you rather be an Athenian or a Spartan?

Autumn 2



Is water more important than anything else?


Spring 1



What did the Romans do for me?




Spring 2




Could we survive without trees?

Summer 1







Where did Grantham come from?

Summer 2



What would life be like without electricity?





Multiplication Check

What is the multiplication tables check?

It is an on-screen check consisting of 25 times table questions. Your child will be able to answer 3 practice questions before taking the actual check. They will then have 6 seconds to answer each question. On average, the check should take no longer than 5 minutes to complete.



Support at home

Reading Spellings
Homework
Times tables

TTRS
Mathsframe